



(A)

8h 24 min



22h 13min      23h      24h




1h 47 min

(B)


18h 27 min

1 heure



20h 12 min


18h 27 min      19h      20h      20h 12 min



1h 45 min

(C)

22h 30 min      23h      24h



4h 45 min