

ex



# GEOMETRIE

tb


b

ab

moy





méd

ins



→ utiliser la règle pour terminer des figures géométriques simples :

1- termine les carrés , entoure le plus correct :



2- retrouve les rectangles et trace les côtés manquants :

